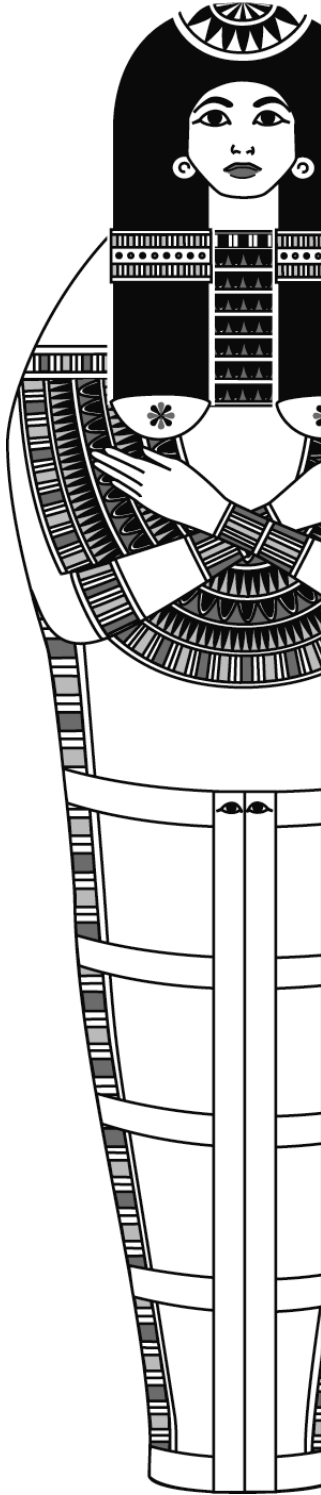


ANCIENT EGYPT  
Pharaohs



Name: -----


**The name of the pharaoh**

The pharaohs were the Kings of Ancient Egypt. The Ancient Egyptians believed that the pharaoh was also a god.


Some of these carvings have the name of a pharaoh written on them.

**Object Number 7** has the name of the pharaoh Khufu written in the oval shape called a cartouche.

In this empty cartouche copy the hieroglyphics which spell the name KHUFU.



Which hieroglyphic do you think stands for the letter U?



**Tutankhamun**

Tutankhamun is probably the most famous of all the Egyptian pharaohs.

**Object Number 2** belonged to Tutankhamun

What is it? .....

Which part is missing? .....

## Dynasties and the Time Line

On this page there is a time line to show when different things happened in Ancient Egypt. The reign of each family of pharaohs is called a **Dynasty**.

Find this object - read the label to discover in which Dynasty this pharaoh ruled. Draw a line to link the picture with the right Dynasty on the Time Line.

Link all the other objects on this page to the Time Line.




### Predynastic pot

This is a water pot from the Predynastic time. It is older than the pharaohs.

Draw the pattern on it.  
What colour is the pattern ?

.....



What is this pot made of ?

Plastic     Metal     Clay

Link it to the time line

The pot has a round base so it would not sit well on a flat table. Circle the reason you think is correct.



The potter could not make it with a flat base.



It hung from cords



It sat on a sand floor.

Why do you think this is the reason? .....

## Time Line


### More modern

Coptic  
Roman  
Ptolemaic Dynasty  
Greek

31 Dynasty  
30 Dynasty  
29 Dynasty  
28 Dynasty  
27 Dynasty  
26 Dynasty  
25 Dynasty  
24 Dynasty  
23 Dynasty  
22 Dynasty  
21 Dynasty  
20 Dynasty  
19 Dynasty  
18 Dynasty  
17 Dynasty  
16 Dynasty  
15 Dynasty  
14 Dynasty  
13 Dynasty  
12 Dynasty  
11 Dynasty  
10 Dynasty  
9 Dynasty  
8 Dynasty  
7 Dynasty  
6 Dynasty  
5 Dynasty  
4 Dynasty  
3 Dynasty  
2 Dynasty  
1 Dynasty

Predynastic

Older



This symbol is called an **ankh**. To the Ancient Egyptians this meant 'Life'.

Where can you see the **ankh** in this case?


Clue: A man is holding it.

Wall painting

Cloth

Statue

Link it to the Time Line.



This is a gravestone from the **Coptic** period.

This is more recent than the pharaohs.

Fill in the missing word.

It is written in the Greek alphabet and reads EULOGIA

What symbol on the gravestone suggests that the person buried was Christian ?

-----

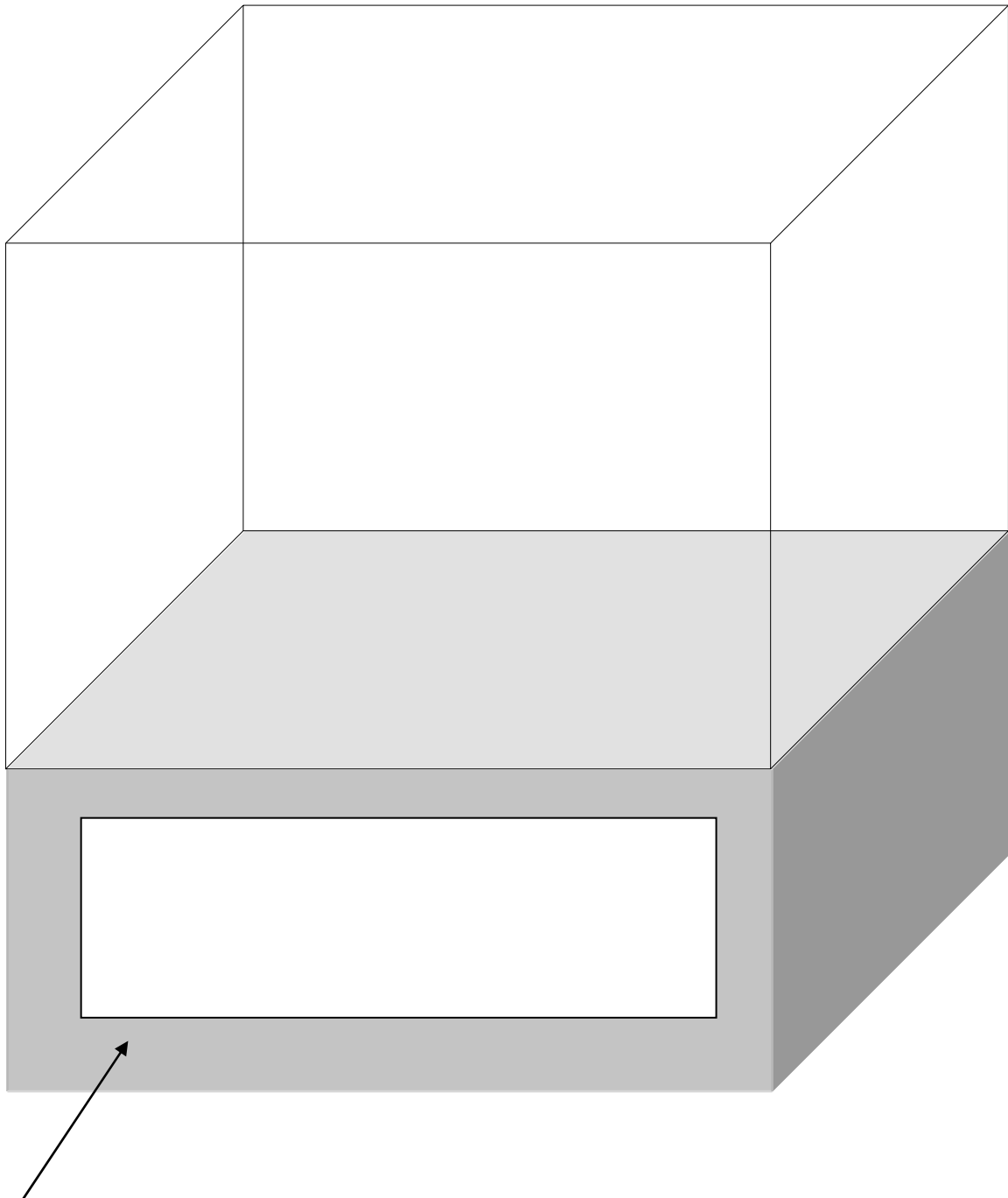
Link it to the Time Line.

## Your museum

If you have time - imagine you work in the museum.

You can choose one object from this case to put in an exhibition.

Draw it in the case below.



Write your own label for your chosen object.